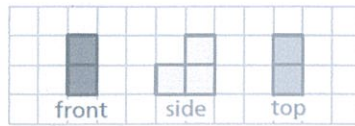

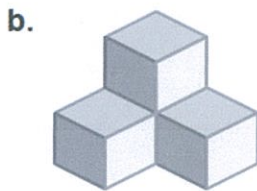


**1****ACTIVITY: Drawing Views of a Solid**

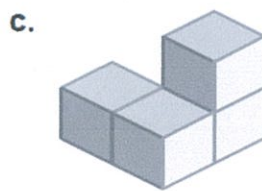
Work with a partner. Draw the front, side, and top views of each stack of cubes. Then find the number of cubes in the stack.



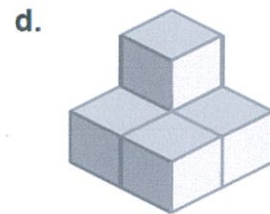
Number of cubes:



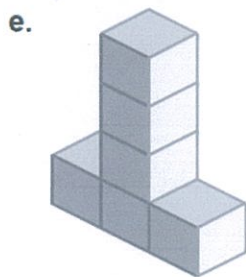
Number of cubes:




Number of cubes:



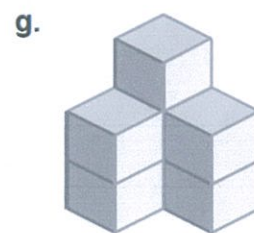
Number of cubes:



Number of cubes:



Number of cubes:



Number of cubes: